

NETBALL NEW ZEALAND



Name: _____

Centre: _____

Region: _____

NZ THEORY EXAMINATION

REGIONAL EXAM 2

June 2007

Time allowed: 1 hour

INSTRUCTIONS TO CANDIDATES	Section One
<p>Please read these carefully before commencing the paper</p> <p>1 Write your name and that of your Centre and Region in the spaces at the top of this page.</p> <p>2 Please use a blue or black pen (not red). Cross out any work not to be marked. Any work in pencil or using Correction Fluid will NOT be marked.</p>	Section Two
<p>3 Answer all questions on the printed examination paper. If you have insufficient space for an answer, use any space on the back of the paper or you may use your own paper. Be sure to put your name on any extra sheets. Label questions carefully. Make sure any extra sheets are handed in with your paper.</p> <p>4 Teams referred to are BLACK and WHITE</p>	Section Three
<p>5 (a) It is NOT necessary to specify that the infringer must stand beside and away from the player taking the penalty (b) Similarly, it is NOT necessary to specify that the Umpire blows the whistle when penalising an infringement.</p> <p>6 Check you have all questions for each of the following three sections:</p> <p style="padding-left: 40px;">Section 1 10 questions – 1 mark each Section 2 5 questions – 2 marks each Section 3 12 questions – 2 or 3 marks each</p>	Total
<p>7 All sections of the examination are in one booklet.</p> <p>8 Read all questions carefully and answer all questions clearly and concisely. Answer only what is asked.</p>	Result
<p>9 For infringements where a general statement can cover a wide range of specific Infringements, the specific statement must be used.</p> <p>eg: General Terminology Specific Terminology Incorrect playing of ball Two bats and catch Incorrect throw in Throwing in from behind an offside area</p> <p>Pass Mark 42.5 marks Total Mark 50 marks</p>	

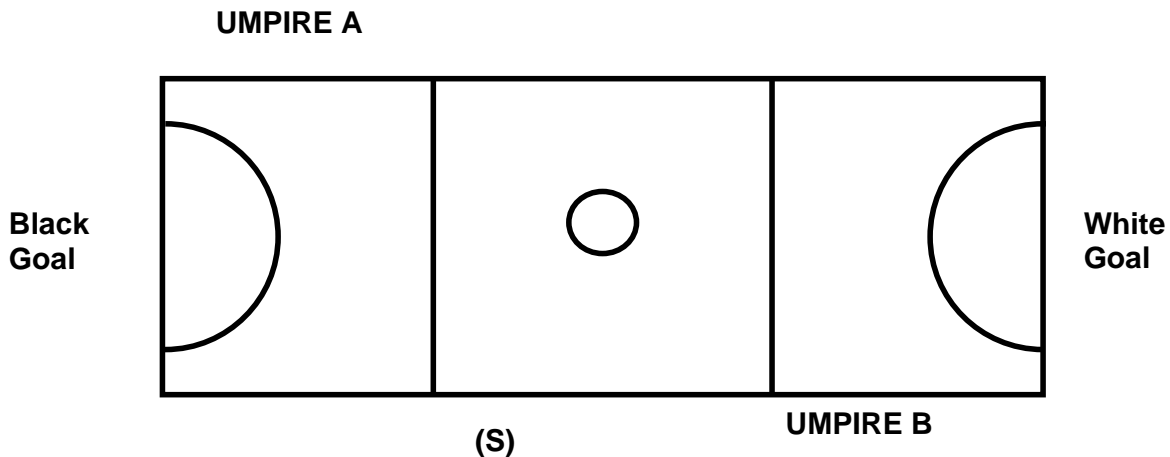
SECTION 1

This Section has 10 questions. Each question is worth **1 mark**.

1/1 When do the Umpires inspect the court?

State two things the Umpires inspect the court for?

Refer to the court diagram (below) for Questions 1/2, 1/3.



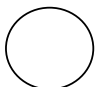
1/2 (i) White has just scored a goal. Black has the next Centre Pass. Which Umpire restarts play?

(ii) At Black's Centre Pass the ball goes out of the court untouched at Point S. Which umpire penalises this infringement?

1/3 Black has the next Centre Pass. Before the whistle is blown Black C moves her right foot behind her out of the Centre Circle, to get away from White C who is defending from the correct distance. Black WA receives the pass in the Centre Third.

(i) Name the infringement/s:

(ii) Which umpire would penalise if an infringement has occurred?



1/4 (i) May an injured player return to the game?

(ii) What is the maximum time allowed for a stoppage for blood?

1/5 (i) Explain the Short Pass rule at a Throw in:

1/6 In a game White C is injured.

(i) Who decides if the injury time is awarded?

(ii) At the end of injury time, who does the Umpire signal the restart of play?


1/7 (i) Name two occasions when a Toss Up would be awarded?

(ii) Name two conditions that players need to observe when taking a Toss Up:

1/8 State two reasons why an Umpire may stop a game for an emergency?

(i) _____

(ii) _____



1/9

Answer Yes or No to the following:

(i) Are the lines on the Court part of the playing area?

(ii) Is coaching allowed during a stoppage for injury/illness?

(iii) Is the ball considered out of court if it touches a spectator?

(iv) May a player tip the ball in an uncontrolled manner into the air more than once?

1/10

State two infringements a Free Pass is awarded for:

(1) _____

(2) _____



SECTION 2

This Section has 5 questions. Each question is worth **2 marks**.
Questions are designed to test your knowledge of Protocols and Discipline.

2/1 (i) Which Umpire(s) indicates the Centre Pass after a goal has been scored?

(ii) Describe the type of whistle blown to signal the end of the game?

2/2 (i) Where does a player report to if ordered off the court?

(ii) How does play continue if a player is suspended from the Centre position?

2/3 (i) If both teams are on court ready to start are the warning whistles blown?

(ii) Can either umpire blow the whistle to signal the end of the game?

2/4 **Complete the sentence to explain the role of the Umpire in the following situations:**

(i) At the commencement of the match the walking umpire takes the ball and places it in the _____ then turns and moves _____.

(ii) An on court player has requested time for an injury. Before awarding the injury time and stopping play the Umpire must:

2/5 **Answer YES or NO to the following:**

(i) During an injury stoppage, may drink bottles be brought onto the court?

(ii) During the game can the Coach or Manager call for time?



SECTION 3

This Section has 12 questions. Each question is worth **2 or 3 marks**.
In this Section questions will vary in format however the intention remains the same.
You are asked to demonstrate understanding of the rule in a practical context.
Remember to state where the penalty is to be taken.

- 3/1** White's Centre Pass is caught by Black GD standing just outside the Goal Circle. Black GD passes the ball to Black GS.

Infringement: _____

Action: _____
(2 marks)

- 3/2** Black GD, defending from the correct distance, makes it difficult for White GS to shoot for goal. White GS passes the ball to White GA who shoots successfully for goal.

Infringement: _____

Action: _____
(2 marks)

- 3/3** White GK catches the rebound from an unsuccessful shot at goal. As White GK passes the ball, Black GA deflects the pass and the ball passes completely through the goal ring.

Infringement/s: _____

Action: _____

Explain your reasons for this action: _____
(3 marks)

- 3/4** Black GA and White GD catch the ball simultaneously in the Goal Circle near the goal post.

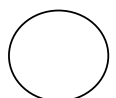
Infringement: _____

Action: _____
(2 marks)

- 3/5** White GS jumps and catches the ball, landing with her right foot over the Goal Line. White GS turns and lifts her right foot before shooting successfully for goal.

Infringement: _____

Action: _____
(2 marks)



3/6 At White's Centre Pass, White WA jumps from the Centre Third and catches the ball before landing in the Goal Third.

Infringement: _____

Action: _____
(2 marks)

3/7 The ball is loose on the ground outside the Goal Circle. Black C rolls the ball to Black GA who shoots successfully for goal.

Name the infringement: _____

State the action the umpire should take: _____

Give the reason for your action: _____
(3 marks)

3/8 White C and Black GK catch the ball simultaneously, before both players land in the Centre Third.

Name the infringement/s? _____

What action should the umpire take? _____

Give the reason for your action: _____
(3 marks)

3/9 Black GS is awarded a penalty inside the Goal Circle. Before the Black GS has time to take the penalty the whistle is blown to end the game.

Infringement: _____

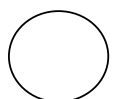
Action: _____
(2 marks)

3/10 As Black WA jumps to receive a high pass, White WD moves into her landing space causing her to land awkwardly before releasing the ball. The pass is caught by Black C near the Goal Circle.

Infringement: _____

Action: _____

Give the reason your decision: _____
(3 marks)



3/11 Black WA is taking a Side Line Throw In. Black C, who retrieved the ball, is standing outside the court as Black WA releases the ball.

Infringement: _____

Action: _____

Give the reason your decision: _____
(3 marks)

3/12 White GD is penalised for obstruction in the Goal Circle. White GD calls out instructions to White GK as Black GS shoots successfully for Goal.

Infringement: _____

Action: _____

Give the reason your decision: _____
(3 marks)

